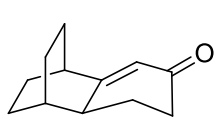


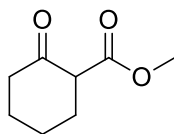
WORKSHOP, Chapter 20B

Enols and Enolates

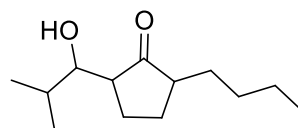
Design a synthesis of A-H starting from cyclohexene. Try and use at least one new reaction from Chapter 20 for each molecule. You can use any reagents and extra carbon sources. Don't worry about stereochemistry.



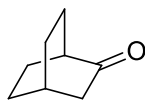
A



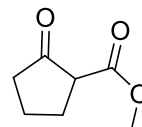

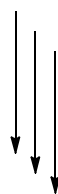
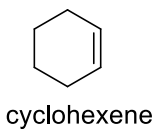

D



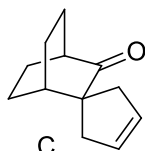
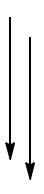
F



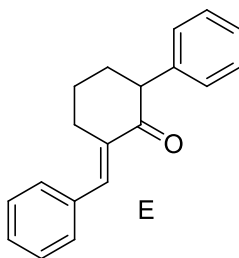
B



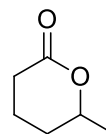
G



C



E



H